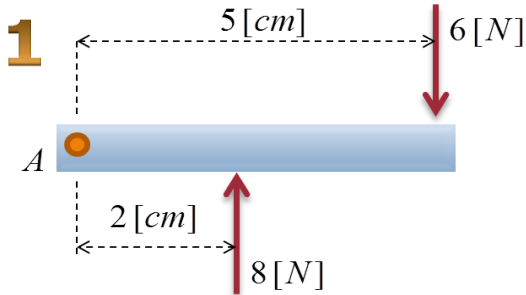
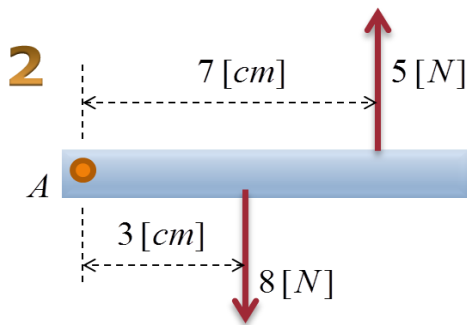


CURSO: Cuarto

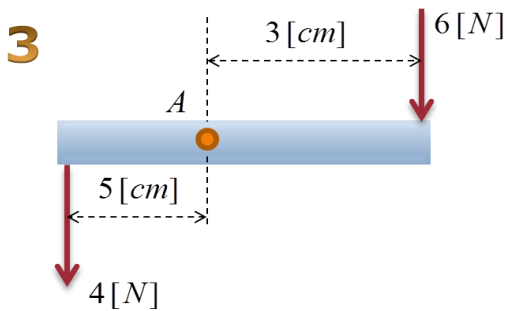
Calcular el torque resultante, respecto al punto "A".



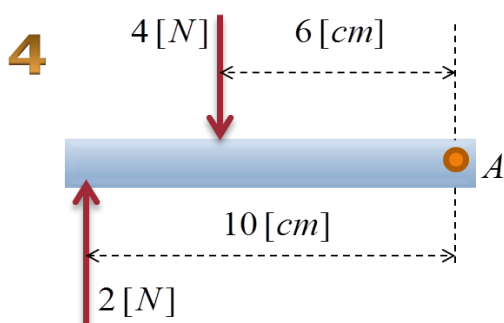
A) -14[N cm] B) 14 [N cm] C) -12 [N cm] D) NA



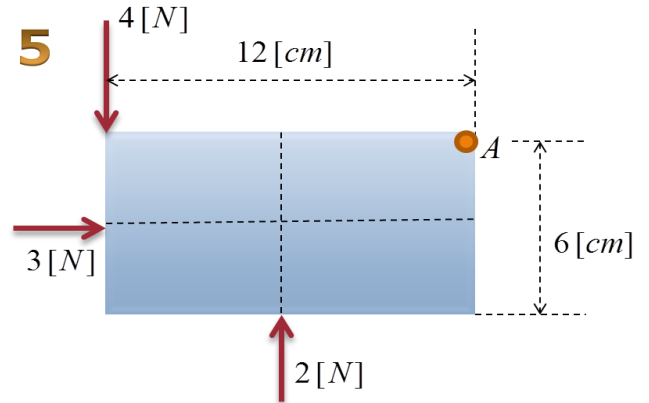
A) -12[N cm] B) 11 [N cm] C) -11 [N cm] D) NA



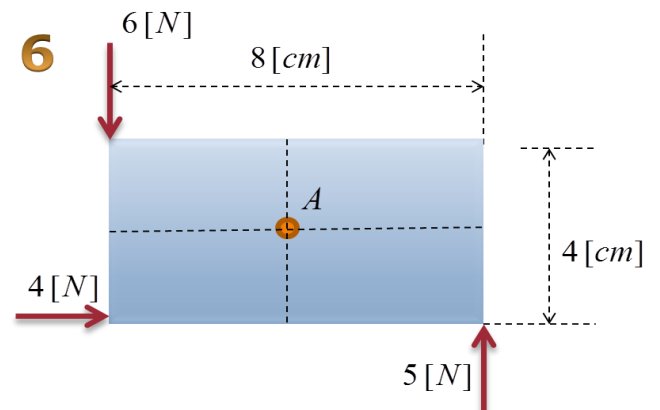
A) -3[N cm] B) -2 [N cm] C) 2 [N cm] D) NA



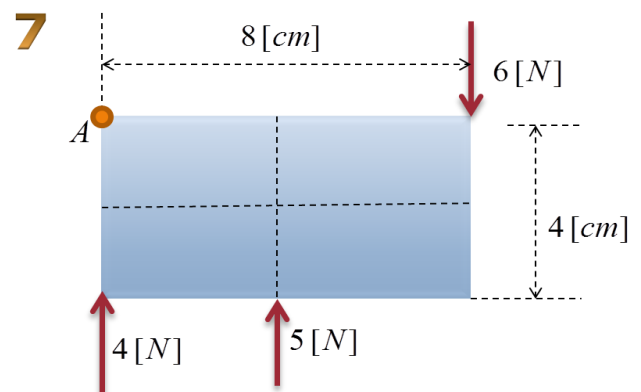
A) -4[N cm] B) 2 [N cm] C) 4 [N cm] D) NA



A) 45[N cm] B) -45 [N cm] C) 46 [N cm] D) NA



A) 51[N cm] B) 52 [N cm] C) -52 [N cm] D) NA



A) 28[N cm] B) 26 [N cm] C) -28 [N cm] D) NA

